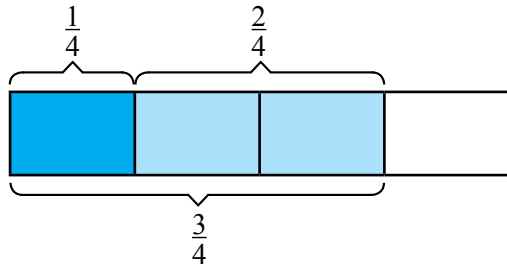


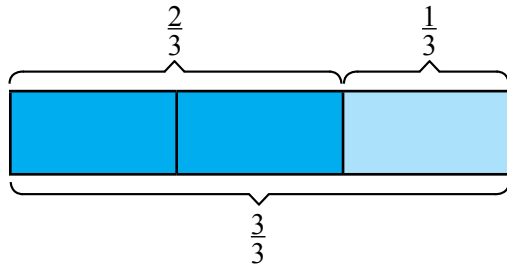
# Addition Fraction Models



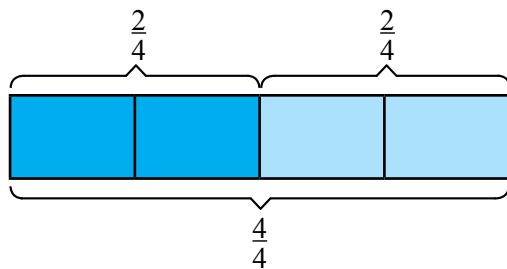
Write the fraction additions that are shown in each model.



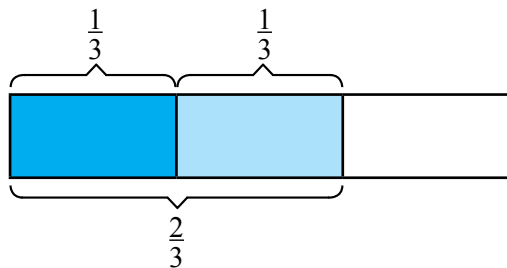
$$\frac{1}{4} + \frac{2}{4} = \frac{\quad}{\quad}$$



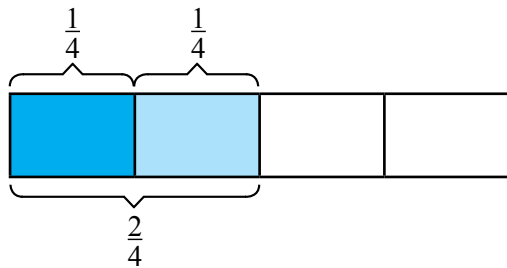
$$\frac{\quad}{\quad} + \frac{\quad}{\quad} = \frac{\quad}{\quad}$$



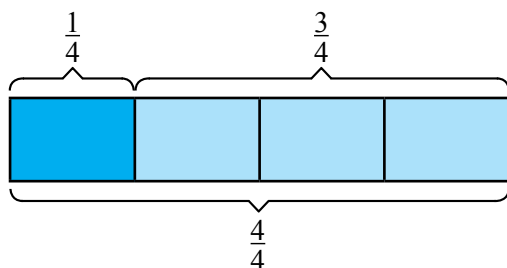
$$\frac{\quad}{\quad} + \frac{\quad}{\quad} = \frac{\quad}{\quad}$$



$$\frac{\quad}{\quad} + \frac{\quad}{\quad} = \frac{\quad}{\quad}$$



$$\frac{\quad}{\quad} + \frac{\quad}{\quad} = \frac{\quad}{\quad}$$



$$\frac{\quad}{\quad} + \frac{\quad}{\quad} = \frac{\quad}{\quad}$$

